



NID DAT PRE MOCK PAPER I

**TIME ALLOWED : 3 hrs
M. M. : 100**

Design Aptitude Test (DAT)- Prelims

Section 1: GAT (m.m. 30)

THIS IS AN INDICATIVE PAPER.

YOU ARE SUPPOSED TO ATTEMPT ALL QUESTIONS.

QUESTIONS 1 to 20 CARRY 1 MARK, Q21-25 CARRY 2 MARKS. THERE SHALL BE NO NEGATIVE MARKING.

MARK YOUR ANSWER BY ENCIRCLING AND SHADING THE CHOICE IN PEN ONLY.

Any other Way of marking Your Answer Shall Result in Cancellation of Those No. of Answer Attempted.

Any question having more than one answer/eraser marks/ink marks/overwriting etc. shall not be accounted for.



Q1.

Identify the art form?

- a) Kalamkari b) Kalighat painting c) Madhubani painting d) Tanjore painting (e) None of these



Q2.

What is the value of the given tail side of the coin?

- a) Rs.5 only b) Rs.2 only c) Rs.1 only d) Paise 50 only (e) None of these

Q3. Match the following:

(i)	Losar	(1)	Karnataka
(ii)	Bohag Bihu	(2)	Bengal
(iii)	Chatth Puja	(3)	Arunachal Pradesh
(iv)	Durga Pujo	(4)	Assam
(v)	Ugadi	(5)	Bihar

- a) i-3, iii-5, v-1, ii-4, iv-2

- b) ii-4, v-5, i-3, iii-2, iv-1

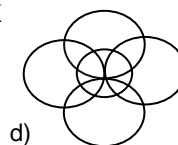

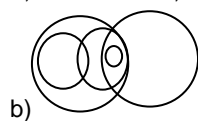

- c) iii-3, iv-5, i-2, v-4, ii-1

- d) ii-3, iv-2, i-5, iii-1, v-4

- (e) None of these

Q4. Which of the following Venn diagram best describes the relationship between the given terms?

NATURAL FIBRES, SYNTHETIC, COTTON, SILK, POLYSILK



- (e) None of these



Q5. Identify the apparatus?

- (a) telescope (b) projector (c) spinning wheel (d) monocycle (e) none of these

Q6. Which of the following logos does not use the colour scheme of 'Red, Navy & White'?

- (a) HDFC bank (b) Union Bank (c) Yes bank (d) Canara Bank (e) None of these

Q7. If you are looking for a product with blue light cutter, what kind of product are you likely to look for?

- (a) Eye glasses (b) Laser Pionters (c) table lamp (d) digital camera (e) none of these

Direction Q8-Q10: Read the given set of information and answer the questions given below:

In a family of 10 members namely, C, D, E, F, G, A, B, K, L and M, C is the daughter of D, whose mother E is the wife of F who is the brother of G. A, whose uncle is G, is the father of E's granddaughter B. L is the grandson of G whose only child is M, who is the husband of K. E has only one son.

Q8. If X is married to G, the how is X related to F?

- (a) sister (b) sister-in-law (c) brother –in-law (d) father-in-law (e) none of these

Q9. How is D related to G?

- (a) Nephew (b) Uncle (c) Aunt (d) Niece (e) none of these

Q10. How is F related to C?

- (a) Maternal Grandfather (b) Maternal Grandmother (c) Granddaughter (d) Mother (e) none of these

Q11. Match the following:



(A)



(B)



(IV) Doctor



(C)

(V) LIC

(VI) DoorDarshan

(c) B-I, D-II, A-III, C-VI

- (I) India Post (II) Prasar Bharti (III) AIIMS (IV) Doctor
(a) A-I, B-II, C-VI, D-III
(d) C-VI, A-V, D-III, B-I

- (b) D-IV, B-V, A-II, C-III
(e) None of these



Q12.

Identify the logo?

- (a) Ceat tyres (b) National News (c) NCERT (d) Circular Design (e) None of these

Refer the given passage for the Questions 13 to 15

In the olden days, students used to stay in the teacher's house and learn. At a young age, boys were sent to the teacher's house. This system of education was called 'Gurukula'.

Prabhakaran was a boy of twelve. He was staying in his teacher's house to learn Sanskrit. Prabhakaran was a good student and his teacher liked him. But the teacher didn't show his affection towards the boy. Rather, he was stricter towards him. One day Prabhakaran was not very attentive in the class. This made the teacher angry. He beat him severely. Prabhakaran wept for some time. Then he wanted to wreak his vengeance on the teacher. In his rage he decided to kill the teacher. He chalked out a plan for this; Prabhakaran would climb up to the roof of his teacher's bedroom with heavy granite stone and drop it on the teacher's head when he was asleep. So after taking the dinner, Prabhakaran went out, picked up a heavy stone and climbed to the roof of the room. After some time his teacher and his wife retired to bed. Before sleeping they talked for some time. During the talk Prabhakaran heard his name being mentioned. He listened to their conversation attentively. The teacher's wife was equally fond of Prabhakaran. She was telling the teacher, 'this morning you were very harsh on Prabhakaran. You beat him umpteen times, mercilessly. Is he not the best boy in your class? If you behave in

this manner he will run away from here and you will lose a good student.'

The teacher replied, 'you are right, I should not have been so cruel to him. But you know he was not attentive in the class. I was taking an important lesson and he was talking to another boy. When I saw it I lost my temper. Prabhakaran should not miss important lessons. So I beat him in such a way that the punishment may deter him from such indifference in future.'

On hearing this, Prabhakaran became very sad. It was with good intention that the teacher punished him. He was overwhelmed with remorse. The whole night he sat on the roof. The next morning after lessons, he approached his teacher when he was alone and confessed to him everything.

Q13. Which behaviour irritated the teacher most?

- (a) Going to roof top with granite stone (b) Listening to the bedroom conversation (c) Indulging into the conversation with other boys during class (d) The weeping of Prabhakaran (e) none of these

Q14. The purpose of the teacher to punish the boy was _____?

- (a) to reform him as he was bad in studies (b) to teach him a lesson as he was not paying attention (c) to send message to the class to improve their behaviour (d) to make the boy vindictive (e) none of these

Q15. Why did the teacher not show affection to Prabhakaran?

- (a) He developed hatred towards him (b) He knew that Prabhakaran was a potential killer (c) Prabhakaran did not have sympathy towards teacher's wife (d) The teacher had seen him talking with other boys (e) none of these

Q 16. Yastika Bhatia & Swetha Verma have been selected for Indian team for which sport?

- (a) Athletics (b) Cricket (c) Hockey (d) Wrestling (e) None of these

Q17. If each letter in the word FRACTION is arranged in alphabetical order (From left to right), and then each vowel is changed to next letter in the English alphabetical series and each consonant is changed to previous letter in English alphabetical series,

Which of the following will be fourth from the right side of the new arrangement thus formed?

- (a) M (b) J (c) P (d) E (e) Q

Q18. Town D is 13 km towards the East of town A. A bus starts from town A, travels 8 km towards West and takes a right turn. After taking the right turn, it travels 5 km and reaches town B. From town B the bus takes a right turn again, travels 21 km and stops. How far and towards which direction must the bus travel to reach town D?

- (a) 13 km towards South (b) 5 km towards West (c) 21 km towards South (d) 5 km towards South (e) None of these

Q19. _____ is the most famous craft of Andhra Pradesh?

- (a) Kalamkari (b) Kasuti (c) Kashidakari (d) Chamba Rupal (e) None of these

Q20. 'Ajrak' is a type of?

- (a) stone (b) print (c) dye (d) calligraphy (e) None of these

Directions (21-24): Read the following information carefully and answer the questions.



Q21. Choose the most appropriate word that can express the image (A)?

- (a) Sophistication (b) Illusion. (c) Futuristic (d) Leisure (e) Ornamental

Q22. Choose the most appropriate word that can express the image (C)?


- (a) Sophistication (b) Isolation. (c) Futuristic (d) Leisure (e) Minimal

Q23. Choose the most appropriate word that can express the image (D)?

- (a) Illusion (b) Isolation. (c) Futuristic (d) Risky (e) Minimal

Q24. Choose the most appropriate word that can express the image (B)?

- (a) Sophistication (b) Isolation. (c) Futuristic (d) Leisure (e) Minimal



Q25.

- (a) sound (b) mound (c) electronic (d) focus (e) None of these

Choose the word that does not connect with the given image?



NID DAT PRE MOCK TEST PAPER I
Design Aptitude Test (DAT)- Prelims

Section 2: CAT (m.m.70)



YOU ARE SUPPOSED TO ATTEMPT ALL QUESTIONS.

You may use dry colours only wherever required or asked for. You shall be marked on your drawing & illustration skills, creative imagination, technical skills, attention to details, uniqueness, originality and innovative ideas.

Q1. Given below is an image, study the same and identify and 5 meaningful elements from the composition.



For each element identified by you, express what they mean to you in terms of interpretation of your choice through line drawing in black and white only, each in the given block (3" x 3"). Write the word and your interpretation as a one line title to your drawing.



AFCMT/DAT-Prelims/2K20-NID01(contd.)

Q2. Choose any ONE of the given objects, illustrate it in colour as is actual. Illustrate the same again imagining it how would it appear if it changed its material to any of the TWO materials given in series (B) other than its original one.

OBJECTS: CHAIR/ BAG/ PENCIL/ STEEL FLASK/ GUITAR/ A FLOWER

SERIES B: steel, glass, wood, fabric, paper, stone, ceramic

(15 marks)

AFCMT/DAT-Prelims/2K20-NID01(contd.)

Q3. Compose an adult human figure in the forward bend standing yoga posture in a surrounding of your choice.

(15 marks)

AFCMT/DAT-Prelims/2K20-NID01(contd.)

Q4. As per the surrounding given by you in Q3 above, make the background as it shall be visible to the person while in the yoga posture drawn by you in Q3.

(15 marks)